

ARMY PUBLIC SCHOOL RATNUCHAK

MULTIPLE ASSESSMENT


SESSION 2021-22

CLASS I

SUBJECT:-ENGLISH

Q1. Fill in the blanks with a/ an.

a. _____ house



b. _____ igloo

c. _____ eagle



d. _____ balloon

Q2. Change Singular noun into Plural noun. (One and Many)



a. Plant _____



b. Friend _____

Q3. Fill in the blanks using is/ am/ are.

She _____ cooking dinner.



a. We _____ waiting for him.

c. I _____ a singer.



Q4. Tick the correct sentence.

- a. the climb tree the child ()
- b. Tia jumps on her bed. ()

Q5. Punctuate the following sentences.

- a. children are playing in the garden




-
- b. rohan has a big car



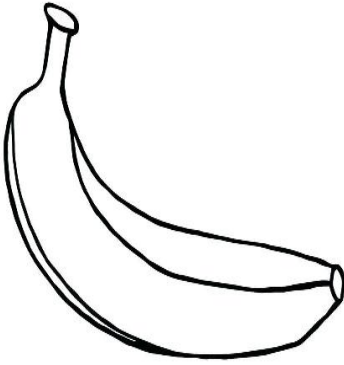
SUBJECT:-HINDI

प्र : चित्रों में लिखा गया रंग भरिए ।

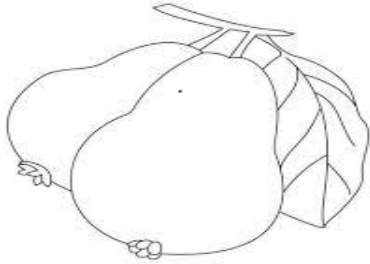
1. लाल



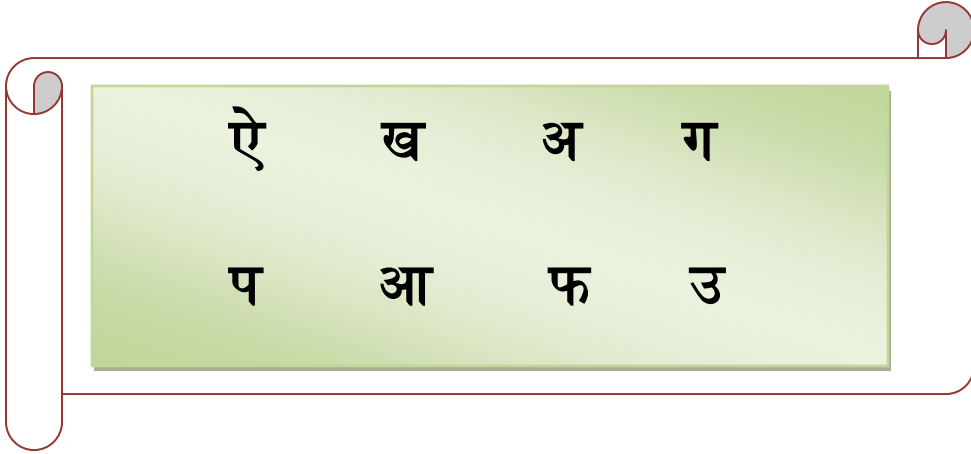
2. पीला



3. हरा



प्र 2 : दिए गए वर्णों में सभी स्वरों को गोला करो ।



प्र 3 : व्यंजन से शुरू होने वाले शब्द पर सही का निशान लगाओ।

कमल, इनाम, मीरा ,

ऐनक, सड़क, अचकन

प्र 4 : दिए गए चित्रों के नाम लिखिए।




SUBJECT:-MATHEMATICS

Q1.

Before and After

Write the numbers which comes before and after the given numbers.

 MATHSDIARY.com

Q2:


Happy Trails
Study Easy

Arrange the following numbers in ascending and descending order in the boxes given below.

Ascending order

65 73 82 33 59

Descending order

12 28 54 47 69












<input type="text"/>	↔	<input type="text"/>
<input type="text"/>	↔	<input type="text"/>
<input type="text"/>	↔	<input type="text"/>
<input type="text"/>	↔	<input type="text"/>
<input type="text"/>	↔	<input type="text"/>

Q3: PUT SIGNS < , > =

Greater Than or Less Than?









Count each group of objects in the box and say how the group on the left compares to the group on the right. Use the symbols for more math practice.

Is the first group **Greater than** > **Less than** < **Equal to** = **the next group?**

Q4: ADD:

Count. Write your answer in the box.

	+		=	
	+		=	
	+		=	
	+		=	


SUBJECT:-EVS

Q1. Choose the correct options.

1. A wooden house where horses are kept is called _____.
a. kennel b. stable c. burrow d. coop
2. A monkey lives on a _____.
a. burrow b. coop c. tree d. kennel
3. Your brothers and sisters are also called _____.
a. cousins b. siblings c. parents d. grandparents
4. _____ is the largest sense organ of our body.
a. skin b. hand c. legs d. arm
5. We have _____ sense organs.
a. two b. three c. four d. five
6. Father and Mother together are known as _____.
a. siblings b. parents c. grandparents d. cousins
7. A single storey house is also called as _____.
a. bungalow b. flats c. windows d. roofs
8. We use _____ to make food.
a. Dining room b. kitchen c. bathroom d. bedroom
9. _____ room is used to entertain our guests.
a. drawing room b. bedroom c. store room d. dining room
10. A house where dogs are kept is called _____.
a. den b. hive c. sea d. kennel

SUBJECT:-COMPUTER

Q1. Fill in the blanks with appropriate words.



Draw Two Four Smart

- a. A mouse has _____ buttons
- b. A computer is a _____ machine.
- c. Computer has _____ main parts.
- d. Computer helps us to _____.

Q2. Identify and write “M” against man-made things and “N” against the natural things.



Q3. Identify who am I and write my name.



a.



b.

**NOTE: - Multiple Assessment is compulsory.
Do in your class work notebook.**