

ARMY PUBLIC SCHOOL, RATNUCHAK
WORKSHEET
SESSION 2019-20
SUBJECT : ENGLISH
CLASS : III
VERBS

NAME:- _____ CLASS & SECTION _____

1. Underline the verbs.

- a). The birds fly.
- b). The girls sing.
- c). The boys play.
- d). Animals roam.
- e). The woman works.

2. Tick the correct verbs.

- a). The dog bark/barks.
- b). The river flows/flow.
- c). Mona like/likes sweets.
- d). The bird sit/sits on the tree.
- e). The children dance/dances.

3. Fill in the similar action words for "eat":- (bite, suck, munch, chew, lick)

- a). I _____ the chappati.
- b). Ram _____ the milk.
- c). Sonu _____ the food.
- d). Ram _____ the chew gum.
- e). Ram _____ the ice-cream.

4. Encircle the verbs.

- a). Banana trees grow very fast.
- b). The tip of the pen broke.
- c). We should grow some roses in our garden.
- d). We fly kites on holidays.
- e). The flight took off on time.

आर्मी पब्लिक स्कूल रत्नूचक

कार्य पत्रिका

विषय हिंदी

कक्षा 3

अंक 15

नाम

प्र01 दिए गए शब्दों में जो सर्वनाम शब्द नहीं है उस पर गोला कीजिए

क शेर वे मुझे वही

ख इसकी जिसको राजा उसकी

प्र02 दिए गए शब्दों के सही रूप में ✓ का निशान लगाइए

क नदी एकवचन बहुवचन

ख टोपिया एकवचन बहुवचन

प्र03 दिए गए शब्दों के दो दो पर्यायवाची शब्द लिखो

क कमल _____ _____

ख पेड़ _____ _____

प्र04 चित्र देखकर विलोम शब्द लिखिए



खुशबू — _____ ऊपर — _____

प्र05 स्त्रीलिंग और पुल्लिंग शब्द आपस में मिल गए हैं। आप इन्हें अलग-अलग करके उनकी जगह पर लिखिए

बिल्ली सेठानी चुहिया बेटा
अध्यापक गायक सिंहनी राजा

स्त्रीलिंग शब्द

- 1 _____
- 2 _____
- 3 _____
- 4 _____
- _____

पुल्लिंग शब्द

- 1 _____
- 2 _____
- 3 _____
- 4 _____
- _____

प्र06 चित्र देखकर चार वाक्य लिखिए—



- 1 _____
- 2 _____
- 3 _____
- 4 _____

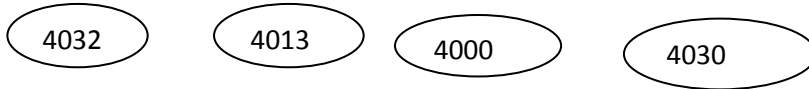
ARMY PUBLIC SCHOOL RATNUCHAK

SESSION-2019-20

CLASS-III

SUBJECT-Mathematics

1. Colour the successor of 4031 Red and predecessor Green

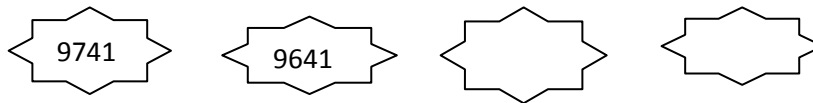


2 $456 + 752 + 0 = 752 + \underline{\hspace{2cm}}$

3 place is just to the right of hundred place.

4 $520 + \underline{\hspace{2cm}} = 620$

5 Observe the pattern and write next two numbers.



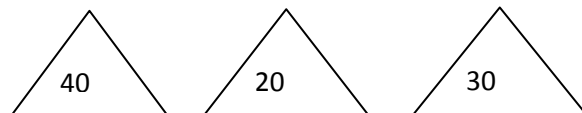
6 $999 + 1$ is the smallest number of three digits (True/False)

7 Sum of smallest 4- digit number and greatest 2- digit number is 1099 (True/False)

8 Fill in the place holder $78 + 13 = 88 + \underline{\hspace{1cm}}$



9 Color the correct answer blue
Round off 28 to the nearest tens is



10. You are given number coins. Rearrange them to make greatest and smallest number.



Greatest number

smallest number

11. Arranging the numbers from smallest to largest is called (ascending/descending order)

12. The number consisting of two tens and five thousands is 5092 or 5126

Write Yes or No

13. Is the greatest two digit number, the predecessor of the smallest three digit number?
14. The estimated sum of 34 and 48 is 80
15. Five thousand three hundred four is 534

ARMY PUBLIC SCHOOL RATNUCHAK

WORKSHEET

SESSION – 2019-20

SUBJECT:-EVS

CLASS -3

Name: _____ **Roll No:** ____ **Class:** _____ **Section:** ____

Q1-Fill ups :-

5 Marks

- 1.The Children of uncle and aunts are called _____.
2. There are many _____ on our tongue.
3. Cricket is an _____.
4. The lungs of the planet are _____ .
5. Animals that eat only plants are called _____.

Q2- Label the diagram of parts of plant:

5 Marks

Label Parts of the Plant



Q3- Match the following: -

5 Marks



1. Chef



2. Omnivore



3. Taste Buds



4. Skin



5. Herb

ARMY PUBLIC SCHOOL RATNUCHAK
SESSION 2019-20
COMPUTER WORKSHEET

Name: _____ Class: III Sec.: _____

Fill in the blanks.

Brain Software Hardware IPO DVD Output

1. Microsoft Word is an example of _____.
2. CPU is the _____ of computer.
3. All the physical parts of a computer are known as _____
4. Printer is an _____ device.
5. _____ is a storage device.
6. A computer works on _____ cycle.

Type the names of five:

INPUT DEVICES	OUTPUT DEVICES	STORAGE DEVICES
_____	_____	_____
_____	_____	_____
_____	_____	_____
_____	_____	_____
_____	_____	_____

Try to find out the names of other machine that also works on the IPO process and write the names in the space given below.

Hint: Juicer

Fruits

Making Juice

Juice

Input

Process

Output

1. _____

2. _____

3. _____

4. _____