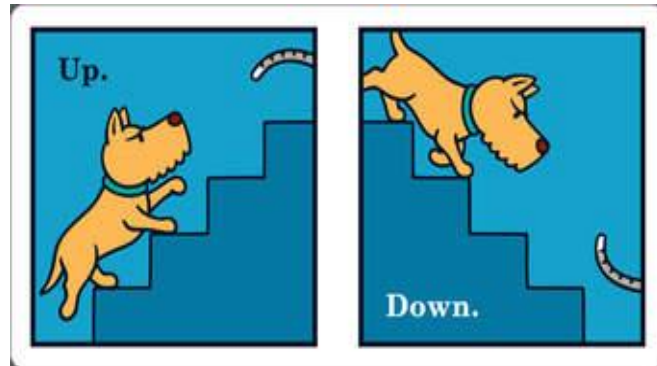


ARMY PUBLIC SCHOOL RATNUCHAK
SESSION 2019-20
WORKSHEET
CLASS-1
SUBJECT-ENGLISH

NAME:- _____


CLASS & SECTION _____

Q1 Write opposites of



- I) Good _____
- ii) Stand _____
- iii) Dry _____
- iv) Big _____
- v) Give _____

Q2 Change the gender of-



- i) Brother _____
- ii) Uncle _____
- iii) King _____
- iv) Sir _____
- v) Grandfather _____

Q3 Choose the correct option and fill in the blanks.

- i) There are six _____ playing in the playground. (boys / boy)
- ii) My _____ is very pretty. (sisters / sister)
- iii) There are twelve _____ in a year. (months / month)
- iv) An _____ is a juicy fruit. (oranges / orange)
- v) The _____ are twinkling in the sky. (stars / star)

Q4 Write the plural of



- i) Cat _____
- ii) Dog _____
- iii) Goat _____
- iv) Girl _____
- v) Pen _____

Q5 Fill in the blanks with is / are / am.



IS



ARE

- i) She _____ going to school.
- ii) Boys _____ playing in the ground.
- iii) We _____ running.
- iv) I _____ writing.
- v) We _____ doing our homework.

आर्मी पब्लिक स्कूल रत्नूचक

कार्य पत्रिका

विषय हिंदी

कक्षा पहली

नाम

प्र1• पहचानो और मिलाओ। (3)

1•



बादल

2•



नारियल

3•



नल

4•



साइकिल

5•



हिरन

6•



बस

प्र2• आ ा की मात्रा के दो –दो शब्द लिखिए। (3)

1• आ ा

प्र3 इ ि की मात्रा के दो –दो शब्द लिखिए। (3)

इ ि

प्र3• रिक्त स्थान भरो। (3)

अ इ उ

ऋ ऐ ओ

प्र4• एक वर्ण लिखकर नया शब्द बनाओ। (1)

		त
		या


प्र4• चित्र देखकर नाम लिखिए। (2)



Army Public School Ratnuchak
Worksheet
Session: 2019-20
Subject: Mathematics

Class: 1st

Q1. Colour pink the object which is on and colour blue the object which is under.




Q2. Colour orange the smaller Chutki.



Q3. Match the object (one to one) of collection A with that of collection B and cross the one which has less objects.



Q4. . Count the objects and circle the correct number.



Q5. What comes after.





Q6. What comes before.

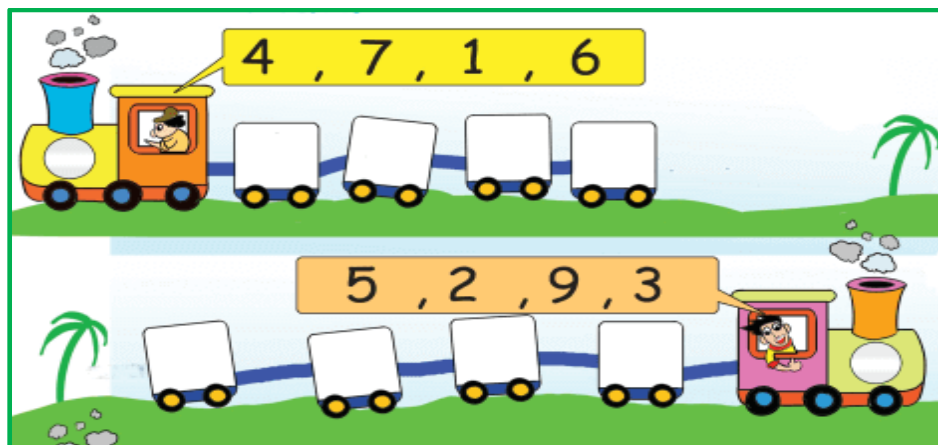




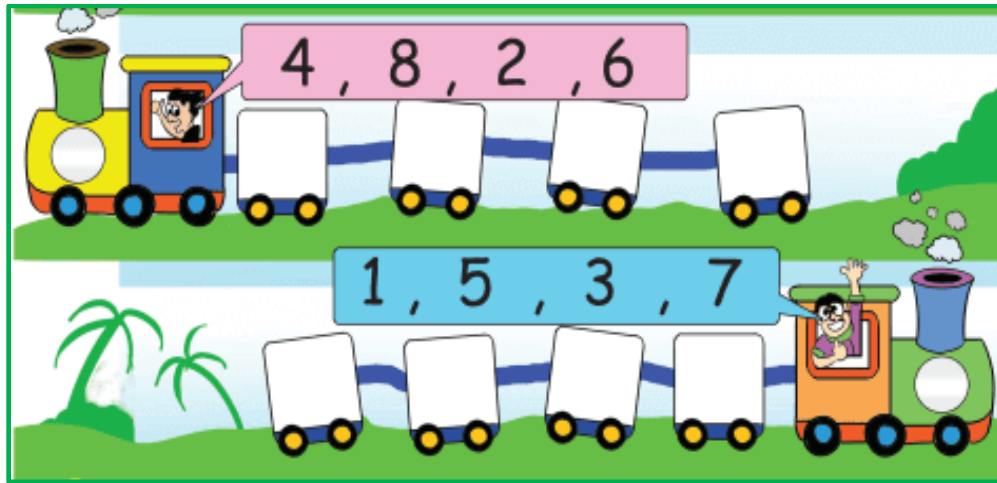
Q7. What comes in between.



Q8. Write the given numbers in increasing order.




Q9. Write the given numbers in decreasing order.



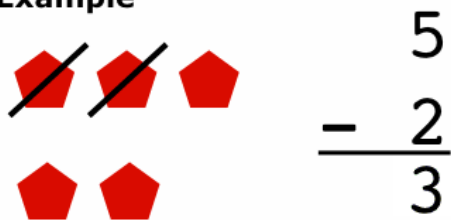
Q10. Count the Objects, write the number and add them.

a)

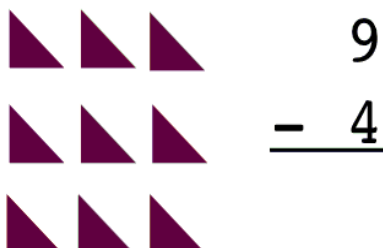


Q11. Subtract.

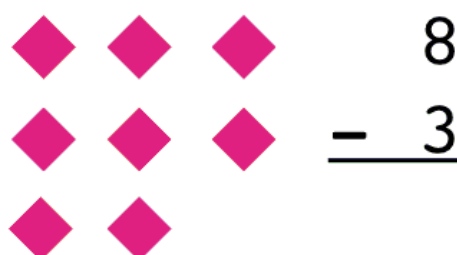
Example



a)



b)





Q12. _____ comes between January and March.

Q13. _____ is the fifth day of the week.

Q14. _____ comes after July.

Q15. Colour (Red) the Apple with the smaller number.



ARMY PUBLIC SCHOOL RATNUCHAK
WORKSHEET
SESSION – 2019-20
CLASS-I
SUBJECT-ENVIRONMENTAL STUDIES

Name: _____ Roll No: _____ Class: _____ Section: _____

About You and Your Family



Complete these sentences about your family.

1. I am _____ years old. My mother is _____ years old.
2. My height is _____ cms. My father's height is _____ cms.
3. My weight is _____ kgs.
4. My birthday is on _____.
5. My mother's birthday is on _____.
6. My father's birthday is on _____.



A Day in School

Fill in the blanks with appropriate words



7. The name of my school is _____.
8. My school has classes from standard _____ to _____.
9. My Principal's name is _____.

10. My class teacher's name is _____.

11. The name of my EVS teacher is _____.

12. We learn _____, _____
_____, _____ subjects in school.

13. My favourite subject is _____.



SENSE ORGANS- Crossword Puzzle

Clues

1. I know tea is hot because I can _____ it.



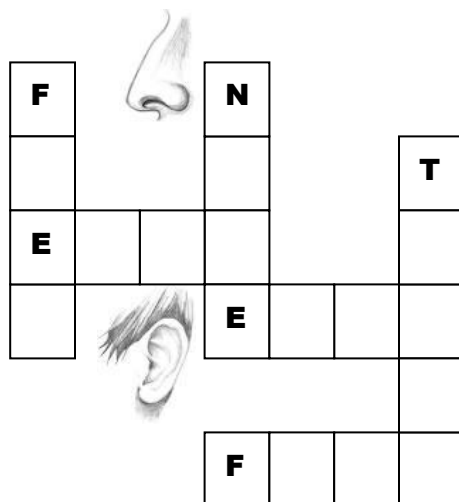
2. I can smell the pizzas through my _____.

3. Those who are blind do not have this sense organ.

4. I hear my mother calling me. which sense organ helped me hear her.

5. the chocolates are yummy. I can _____ them.

6. Did you count how many sense organs are there in total?



ARMY PUBLIC SCHOOL RATNUCHAK
SESSION 2019-20
COMPUTER WORKSHEET

Name: _____ Class: I. Sec.: _____

Fill in the blanks

Train	Easy	Machine	TV	CPU	Man-made
-------	------	---------	----	-----	----------

1. A computer is a _____.
2. A _____ is a machine.
3. A machine makes our work _____.
4. A _____ is the brain of a computer.
5. A monitor looks like a _____ screen.
6. Machines are _____ things.

Find out the names of different parts of computers

G	U	I	O	P	T	H	J	T	K	M	E	F
Y	S	C	P	U	L	R	W	A	L	O	W	O
H	S	L	A	P	P	O	P	B	U	U	R	L
O	F	M	O	N	I	T	O	R	R	S	F	K
I	G	Y	G	R	U	Q	W	E	S	E	H	J
E	K	E	Y	B	O	A	R	D	D	M	N	J
A	J	I	S	M	A	A	T	P	H	O	T	E

Tick the correct one.

Machine

Manual

Electronic

