

ARMY PUBLIC SCHOOL RATNUCHAK

SESSION: 2017-18

WORKSHEET

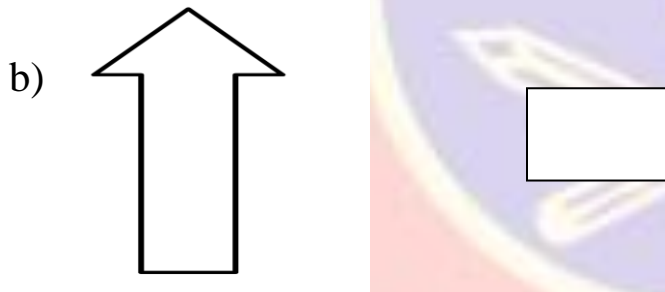
CLASS I

MATHEMATICS

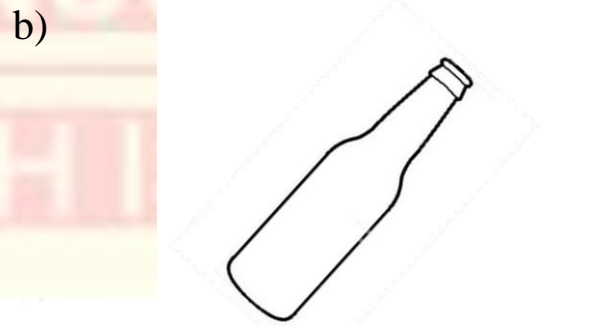
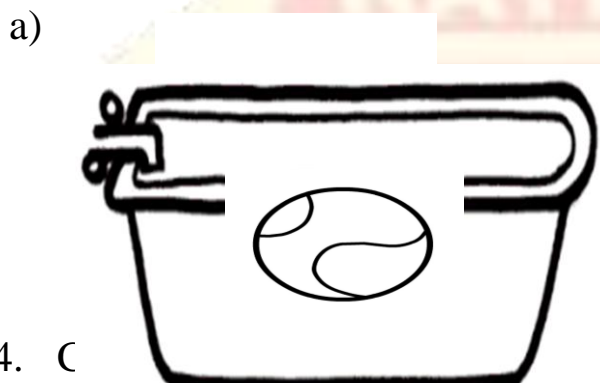
Q1. Tick the bigger object and cross the smaller object.



Q2. Tick the thicker object and cross the thinner object.



Q3. Colour the object red that is in the tub and blue that is out of the tub.



Q4. C

a) 17 , 19

b) 16 , 13

Q5. Circle the smallest number.

a) 9 , 20 , 10

b) 12 , 18 , 5

Q6. What comes after.

12 , _____

Q7. What comes before.

_____, 20

Q8. In 32 , 2 is at the _____ place.

a) Tens

b) Ones

c) None

Q9. Write True or False.

a) 5 is smaller than 9 _____

b) The spelling of 11 is eleven _____

Q10. Write the number name.

19 : _____

